

Year 5 Homework C - 10th November 2023

Remember to also have a go at TTRS, Spelling Shed and Lexia (if you have it)! All links are on the class page.

Forgotten your login? Let me know!

Factor Pairs

Draw lines to match the factor pairs of 20.

Remember: When multiplied together, factor pairs will equal 20.

10

4

1

2

5

20

Multiplication

$9 \times 6 = \underline{\quad\quad\quad}. \quad 6 \times 12 = \underline{\quad\quad\quad}.$

$10 \times 6 = \underline{\quad\quad\quad}. \quad 7 \times 6 = \underline{\quad\quad\quad}.$

$12 \times 6 = \underline{\quad\quad\quad}. \quad 6 \times 2 = \underline{\quad\quad\quad}.$

$3 \times 6 = \underline{\quad\quad\quad}. \quad 1 \times 6 = \underline{\quad\quad\quad}.$

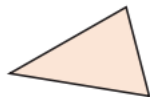
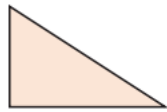
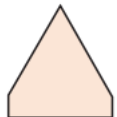

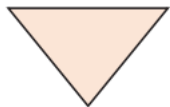
$4 \times 6 = \underline{\quad\quad\quad}. \quad 11 \times 6 = \underline{\quad\quad\quad}.$

$6 \times 6 = \underline{\quad\quad\quad}. \quad 6 \times 5 = \underline{\quad\quad\quad}.$

1	2	3	4	5	6	7	8	9	10
11	12	13	14	15	16	17	18	19	20
21	22	23	24	25	26	27	28	29	30
31	32	33	34	35	36	37	38	39	40
41	42	43	44	45	46	47	48	49	50
51	52	53	54	55	56	57	58	59	60
61	62	63	64	65	66	67	68	69	70
71	72	73	74	75	76	77	78	79	80
81	82	83	84	85	86	87	88	89	90
91	92	93	94	95	96	97	98	99	100

Shape

Tick the shapes that are triangles.



Addition and Subtraction

Solve these calculations:

	7	8	3	4	1
+		2	8	5	2

	5	4	2	5	4
-	1	4	7	3	2