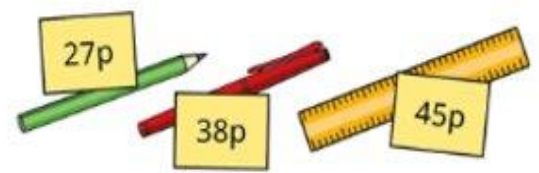


Name: _____



Year 2 homework 01.02.24
Return by 08.02.24

How much do these three items cost in total?



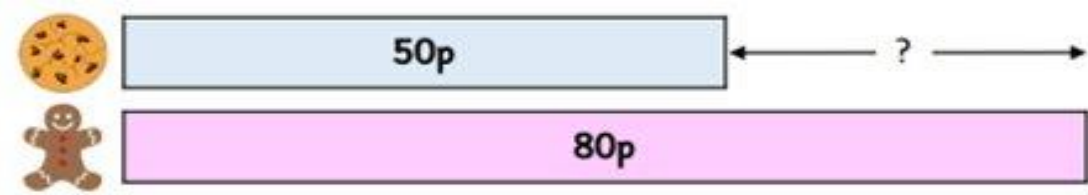
How much do these three items cost in total?



How much do these four items cost in total?



The total value is £

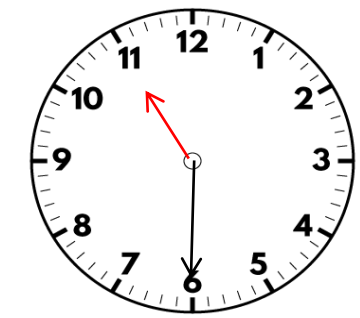


50p + _____ = 80p.

Complete the table (first has been done for you)

Tens	Ones	Number
		32
		25
		89

Time



What time is the clock showing?