

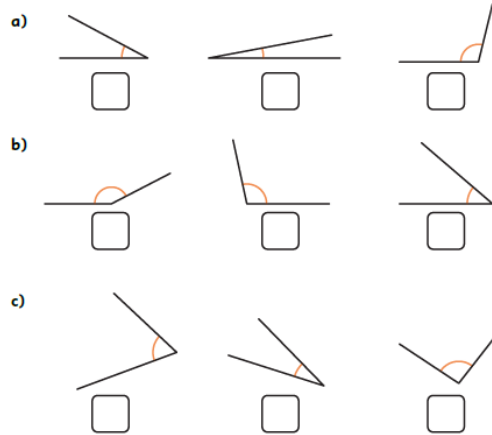
Year 5 Homework C - 6th October 2023

Remember to also have a go at TTRS, Spelling Shed and Lexia (if you have it)! All links are on the class page.

Forgotten your login? Let me know!

Shape

Tick the **smallest** angle in each set.



Multiplication

$9 \times 5 = \underline{\quad}$. $5 \times 12 = \underline{\quad}$.
 $10 \times 5 = \underline{\quad}$. $7 \times 5 = \underline{\quad}$.
 $12 \times 5 = \underline{\quad}$. $5 \times 2 = \underline{\quad}$.
 $3 \times 5 = \underline{\quad}$. $1 \times 5 = \underline{\quad}$.
 $4 \times 5 = \underline{\quad}$. $11 \times 5 = \underline{\quad}$.
 $6 \times 5 = \underline{\quad}$. $5 \times 5 = \underline{\quad}$.

1	2	3	4	5	6	7	8	9	10
11	12	13	14	15	16	17	18	19	20
21	22	23	24	25	26	27	28	29	30
31	32	33	34	35	36	37	38	39	40
41	42	43	44	45	46	47	48	49	50
51	52	53	54	55	56	57	58	59	60
61	62	63	64	65	66	67	68	69	70
71	72	73	74	75	76	77	78	79	80
81	82	83	84	85	86	87	88	89	90
91	92	93	94	95	96	97	98	99	100

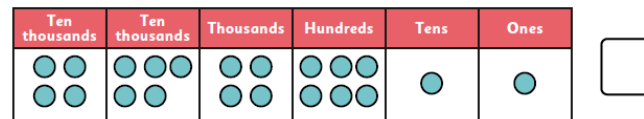
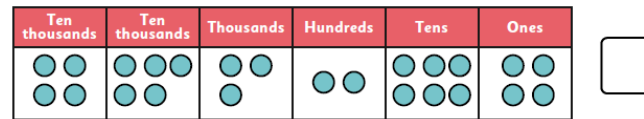
Addition and Subtraction

Tth	Th	H	T	O
	3	4	5	2
+	2	6	3	9
<hr/>				
<hr/>				

Tth	Th	H	T	O
	7	8	6	5
-	2	9	3	7
<hr/>				
<hr/>				

Place Value

1. Tick the greater number:



How do you know which one is greater?

2. Circle the **greater** number in each pair.

65,405

60,987

13,078

9,895

24,865

24,905

88,462

88,376