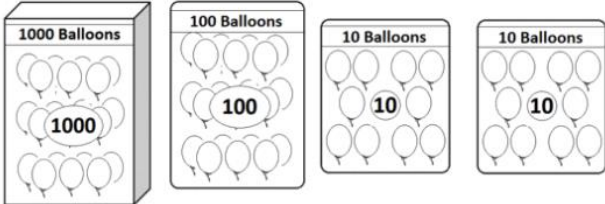
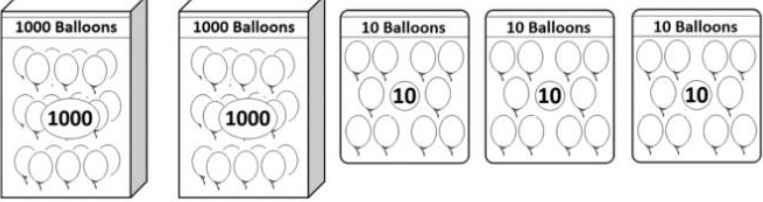



Year 4 Homework

1)  _____ balloons

2)  _____ balloons

- | | |
|-----------------|----------------------|
| 1) CC = _____ | 8) CXC = _____ |
| 2) CL = _____ | 9) DCCX = _____ |
| 3) CDV = _____ | 10) DLXXII = _____ |
| 4) DLX = _____ | 11) CLXXIX = _____ |
| 5) CML = _____ | 12) DCCLXX = _____ |
| 6) CXXV = _____ | 13) CMXXXVII = _____ |
| 7) DLVI = _____ | 14) DCLXXXIV = _____ |

- | | |
|---|---|
| 1) $500 + 4 + 70$ | |
| 2) Half of 30 | |
| 3) What is this triangle called? |  |
| 4) $30 - 16$ | |
| 5) What is the value of the digit 7 in the number 1726 | |
| 6) Double 14 | |
| 7) 5×6 | |
| 8) Write down all the odd numbers from the list below
42, 37, 21, 26, 38, 63 | |
| 9) Round 67 to the nearest 10. | |
| 10) What number comes halfway between 30 and 50? | |

Time

What time is it?



How long until the next hour in minutes?

What is 00:00 in words?

What is 13:30 in words?

Times tables

12×12

3×10

1×1

3×8

9×7

8×8

5×11

9×2

$132 \div 12$

$20 \div 2$

$77 \div 11$

$36 \div 9$

$80 \div 8$

$110 \div 10$

$48 \div 8$