

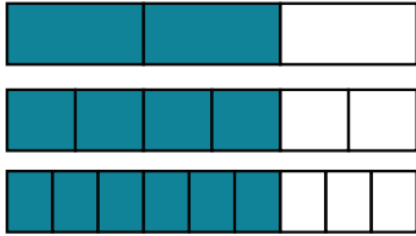
# Year 5 Homework C - 20<sup>th</sup> October 2023

**Remember** to also have a go at TTRS, Spelling Shed and Lexia (if you have it)! All links are on the class page.

Forgotten your login? Let me know!

## Fractions

Use the diagrams to complete the equivalent fractions.



$$\frac{2}{3} = \frac{\square}{6} = \frac{\square}{9}$$

## Multiplication

$9 \times 4 = \underline{\quad\quad}. \quad 4 \times 12 = \underline{\quad\quad}.$

$10 \times 4 = \underline{\quad\quad}. \quad 7 \times 4 = \underline{\quad\quad}.$

$12 \times 4 = \underline{\quad\quad}. \quad 4 \times 2 = \underline{\quad\quad}.$

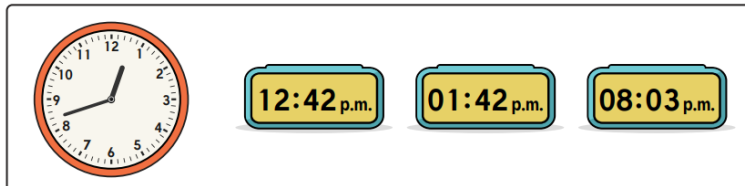
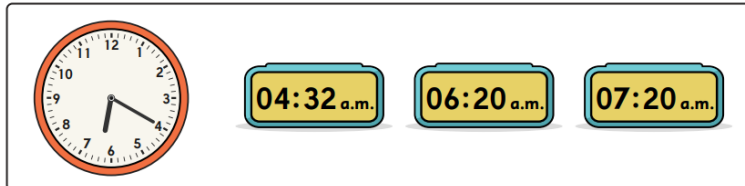
$3 \times 4 = \underline{\quad\quad}. \quad 1 \times 4 = \underline{\quad\quad}.$

$4 \times 4 = \underline{\quad\quad}. \quad 11 \times 4 = \underline{\quad\quad}.$

$6 \times 4 = \underline{\quad\quad}. \quad 4 \times 5 = \underline{\quad\quad}.$

1	2	3	4	5	6	7	8	9	10
11	12	13	14	15	16	17	18	19	20
21	22	23	24	25	26	27	28	29	30
31	32	33	34	35	36	37	38	39	40
41	42	43	44	45	46	47	48	49	50
51	52	53	54	55	56	57	58	59	60
61	62	63	64	65	66	67	68	69	70
71	72	73	74	75	76	77	78	79	80
81	82	83	84	85	86	87	88	89	90
91	92	93	94	95	96	97	98	99	100

**Time** Circle the correct digital time that displays what is shown on these clocks.



## Addition and Subtraction

Work out each calculation to decide if the statement is true or false.

True False

$33692 + 18430 = 41122$

$79205 + 41676 = 120881$

$79206 + 41677 = 120882$