

A packet of lentils weighs 450g and a packet of kidney beans weighs 385g.
How much do they both weigh altogether?

A shopkeeper has 367 bottles of lemonade.
He orders 480 more. How many bottles of lemonade will he have now?

Put in ascending order

1) 216, 520, 319, 350, 207

--	--	--	--	--

$$\begin{array}{r} 672 \\ - 335 \\ \hline \end{array}$$

$$\begin{array}{r} 867 \\ - 338 \\ \hline \end{array}$$

$$\begin{array}{r} 584 \\ - 326 \\ \hline \end{array}$$

How many weeks
are in a
fortnight?

What types of
triangles are there?

$$\begin{array}{r} 3 \overline{) 66} \\ \hline \end{array}$$

$$\begin{array}{r} 2 \overline{) 84} \\ \hline \end{array}$$

$$\begin{array}{r} 2 \overline{) 426} \\ \hline \end{array}$$

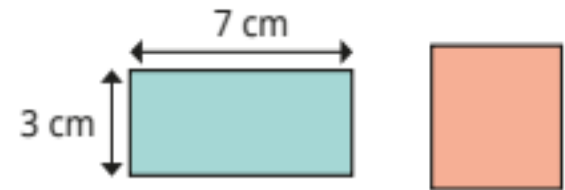
$$\begin{array}{r} 3 \overline{) 669} \\ \hline \end{array}$$

How many sides do you need
to measure to find the perimeter
of each shape?



Explain your answers.

The rectangle and square have
the same perimeter.



What is the length of each side of
the square?

[1]

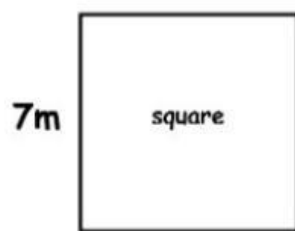
$$\begin{array}{r} 227 \\ + 445 \\ \hline \\ \hline \end{array}$$

[2]

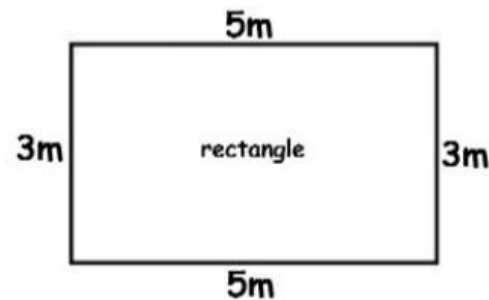
$$\begin{array}{r} 198 \\ + 360 \\ \hline \\ \hline \end{array}$$

[3]

$$\begin{array}{r} 212 \\ + 404 \\ \hline \\ \hline \end{array}$$



Perimeter = _____



Perimeter = _____

Write down
the days of
the week

It was time for school. When John looked at the clock, the minute hand was on 6 and the hour hand was on 8. What time was it? _____

Fill in the missing numbers

c) _____ 500 550 600 _____ 700

d) 700 _____ _____ 550 500 450

Put into ascending order (smallest to biggest)

1) 25, 16, 38, 52, 67 _____

Write down the number bonds to 10

How many
weeks are in
a fortnight?